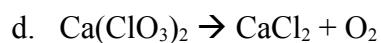
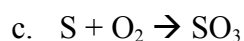
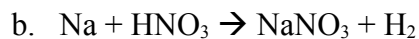


Equation Writing Practice Problems (Level 2)

1. Balance each of the following equations:



2. Balance each of the following equations:

